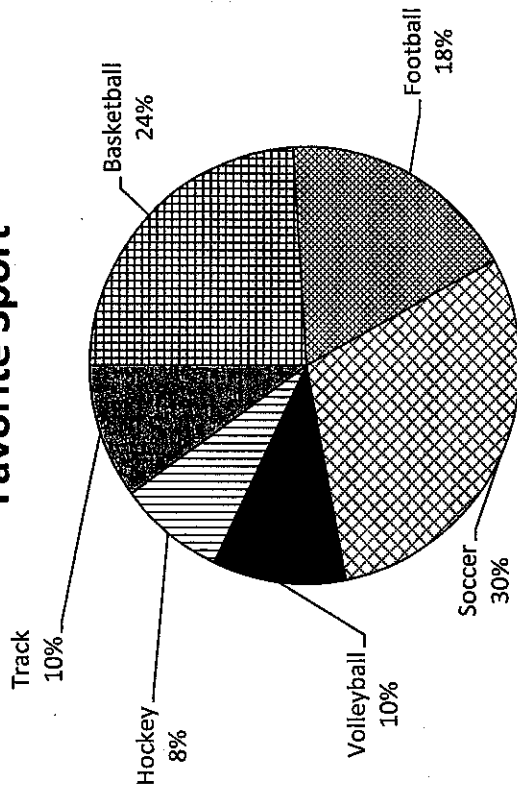


Name: *Miss Sciandra*

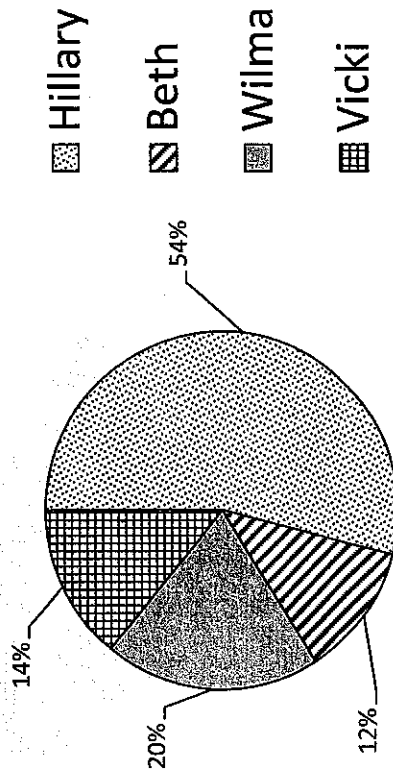
Favorite Sport



400 Middle School students responded to a survey about their favorite sport. The pie chart shows the responses. Answer the following questions:

1. How many students answered football as their favorite sport? _____
2. How many students answered hockey as their favorite sport? _____
3. How many more students preferred soccer to track as their favorite sport? _____
4. How many more students preferred basketball to volleyball as their favorite sport? _____
5. How many students total preferred basketball, hockey, and track as their favorite? _____

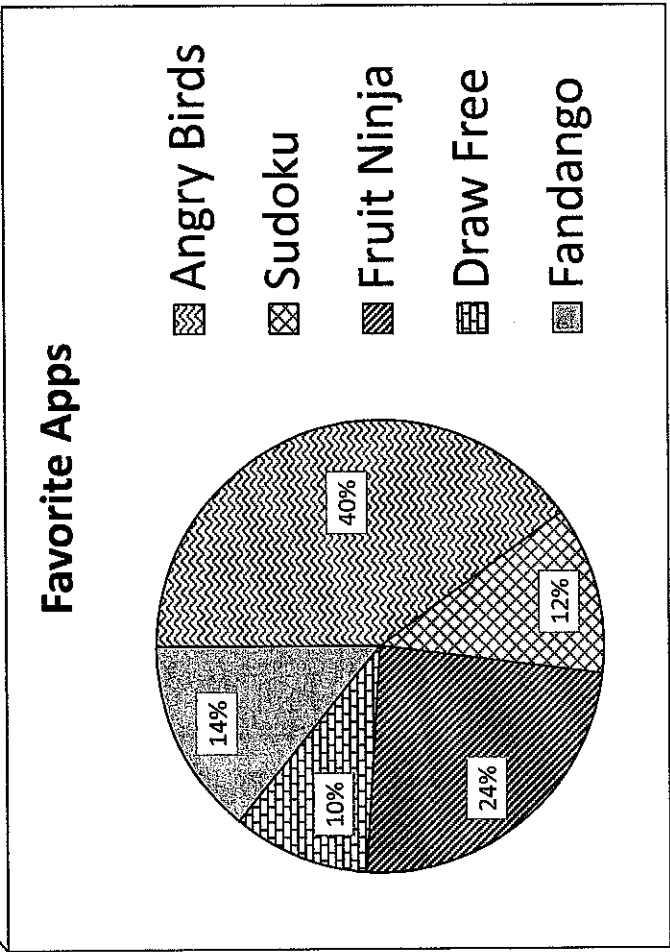
8th Grade Voters



150 8th Grade students voted in the recent election of the homecoming queen. The voting results are in the pie chart. Answer the following questions:

1. How many votes did Wilma receive? _____
2. How many votes did Hillary receive? _____
3. How many votes did Beth receive? _____
4. How many more votes did Hillary receive than Wilma received? _____
5. How many more votes did Vicki receive than Beth received? _____

3




200 new iPhone users were polled about the apps that they first downloaded. The pie chart shows their responses. Answer the following questions:

1. How many downloaded Angry Birds? _____
2. How many people downloaded the Sudoku and Draw Free apps together? _____
3. How many more people downloaded Fruit Ninja than downloaded Sudoku? _____
4. Fandango was downloaded by how many people? _____
5. How many people downloaded Angry Birds and Fandango combined? _____

Favorite Soda

4



55 students were surveyed about their favorite soda. Make a pie chart to represent the % of each Soda.

Mt Dew : 37
Coca Cola : 5
Grape : 1
Sprite : 7
Dr. Pepper : 5